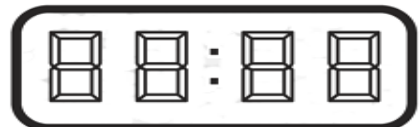
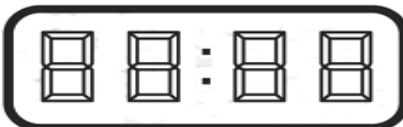
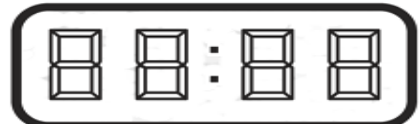
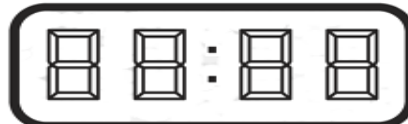


Same number times!

What to do...

1. Use the digital displays below to write as many clock times as possible where all the digits are the same number.
2. Draw the hands on the clock faces to match the digital times you have done.
3. Write the times in words underneath each clock face to the nearest five minutes
e.g. twenty past two.



Time in words

Twenty past two



Time in words



Time in words



Time in words



Time in words



Time in words
